

Surname	Centre Number	Candidate Number
Other Names		2



GCE AS/A level

1091/01



S15-1091-01

CHEMISTRY – CH1

A.M. FRIDAY, 22 May 2015

1 hour 30 minutes

ADDITIONAL MATERIALS

In addition to this examination paper, you will need a:

- calculator;
- copy of the **Periodic Table** supplied by WJEC.
Refer to it for any **relative atomic masses** you require.

INSTRUCTIONS TO CANDIDATES

Use black ink or black ball-point pen. Do not use gel pen or correction fluid.

Write your name, centre number and candidate number in the spaces at the top of this page.

Section A Answer **all** questions in the spaces provided.

Section B Answer **all** questions in the spaces provided.

Candidates are advised to allocate their time appropriately between **Section A (10 marks)** and **Section B (70 marks)**.

INFORMATION FOR CANDIDATES

The number of marks is given in brackets at the end of each question or part-question.

The maximum mark for this paper is 80.

Your answers must be relevant and must make full use of the information given to be awarded full marks for a question.

The **QWC** label alongside particular part-questions indicates those where the Quality of Written Communication is assessed.

If you run out of space, use the additional page(s) at the back of the booklet, taking care to number the question(s) correctly.

For Examiner's use only		
Question	Maximum Mark	Mark Awarded
Section A 1. to 4.	10	
Section B 5.	11	
6.	12	
7.	14	
8.	19	
9.	14	
Total	80	

1091
010001

MAY1510910101

SECTION A

Answer all questions in the spaces provided.

1. Complete the table below to show the composition of the following species. [2]

Species	Protons	Neutrons	Electrons
$^{20}_{10}\text{Ne}$			
$^{18}_8\text{O}^{2-}$			

2. The isotope ^{226}Ra is radioactive. It decays by α -emission and has a half-life of 1 600 years.

(a) Give the mass number and symbol of the species formed by the loss of one α -particle from an atom of ^{226}Ra . [1]

.....

(b) State what is meant by the term *half-life*. [1]

.....

.....

(c) A sample of ^{226}Ra , of initial mass 1.00 g, decays for 3 200 years. Calculate the number of **moles** of ^{226}Ra left after this period. [2]

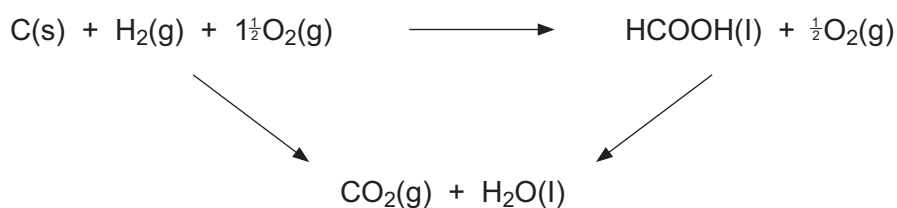
Number of moles = mol



3. Methanoic acid is the simplest carboxylic acid and occurs naturally, most notably in ant venom. It has a molar mass of 46.02 g mol^{-1} .

(a) State what is meant by *molar mass*. [1]

(b) Use the values in the table below to calculate the enthalpy change of formation for methanoic acid. [1]



Substance	Enthalpy change of combustion, $\Delta H_c^\theta / \text{kJ mol}^{-1}$
C	-394
H ₂	-286
HCOOH	-263

$\Delta H_f^\theta = \dots\dots\dots \text{kJ mol}^{-1}$



4

Examiner
only

4. A sample of 0.50g of calcium carbonate completely reacts with 50cm³ of hydrochloric acid solution of concentration 2.0 mol dm⁻³ to give calcium chloride, carbon dioxide and water.

(a) Suggest a method for measuring the rate of this reaction. [1]

.....
.....

(b) State, giving a reason, what effect using 100cm³ of hydrochloric acid solution of concentration 2.0 mol dm⁻³ would have on the initial rate of this reaction. [1]

.....
.....

Section A Total [10]



04

BLANK PAGE

**PLEASE DO NOT WRITE
ON THIS PAGE**

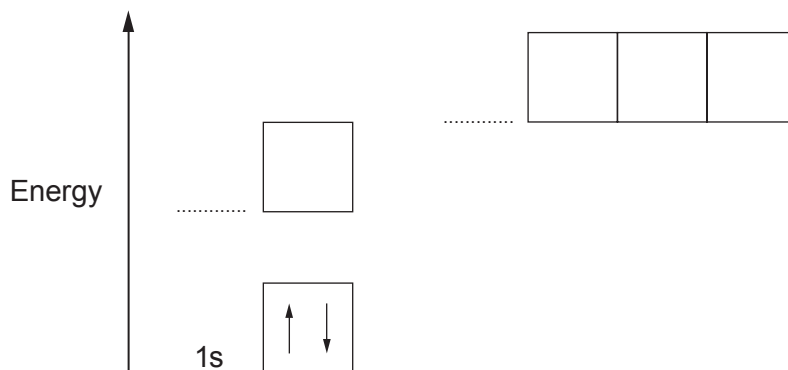
1091
010005



SECTION B

Answer all questions in the spaces provided.

5. (a) Electrons are arranged in energy levels. The diagram below shows two electrons in the 1s level in a nitrogen atom.



Complete the diagram for the electrons in a nitrogen atom by labelling the sub-shell levels and showing how the electrons are arranged. [2]

- (b) Nitrogen forms several oxides.

- (i) An oxide of nitrogen contains 25.9% by mass of nitrogen. Calculate the empirical formula of this oxide. [2]

Empirical formula

- (ii) Dinitrogen oxide is formed when ammonia is oxidised.



Balance the equation above.

[1]



(iii) Nitrogen dioxide is formed when calcium nitrate decomposes.



Calculate the total volume of gas, measured at room temperature and pressure, which would be produced when 0.886 g of calcium nitrate decomposes. [3]

[1 mol of gas occupies 24.0 dm³ at room temperature and pressure]

Volume = dm³

(c) Hydrated calcium nitrate can be represented by the formula Ca(NO₃)₂.xH₂O.

A 6.04 g sample of Ca(NO₃)₂.xH₂O contains 1.84 g of water of crystallisation.

Calculate the value of *x* in Ca(NO₃)₂.xH₂O. You **must** show your working. [3]

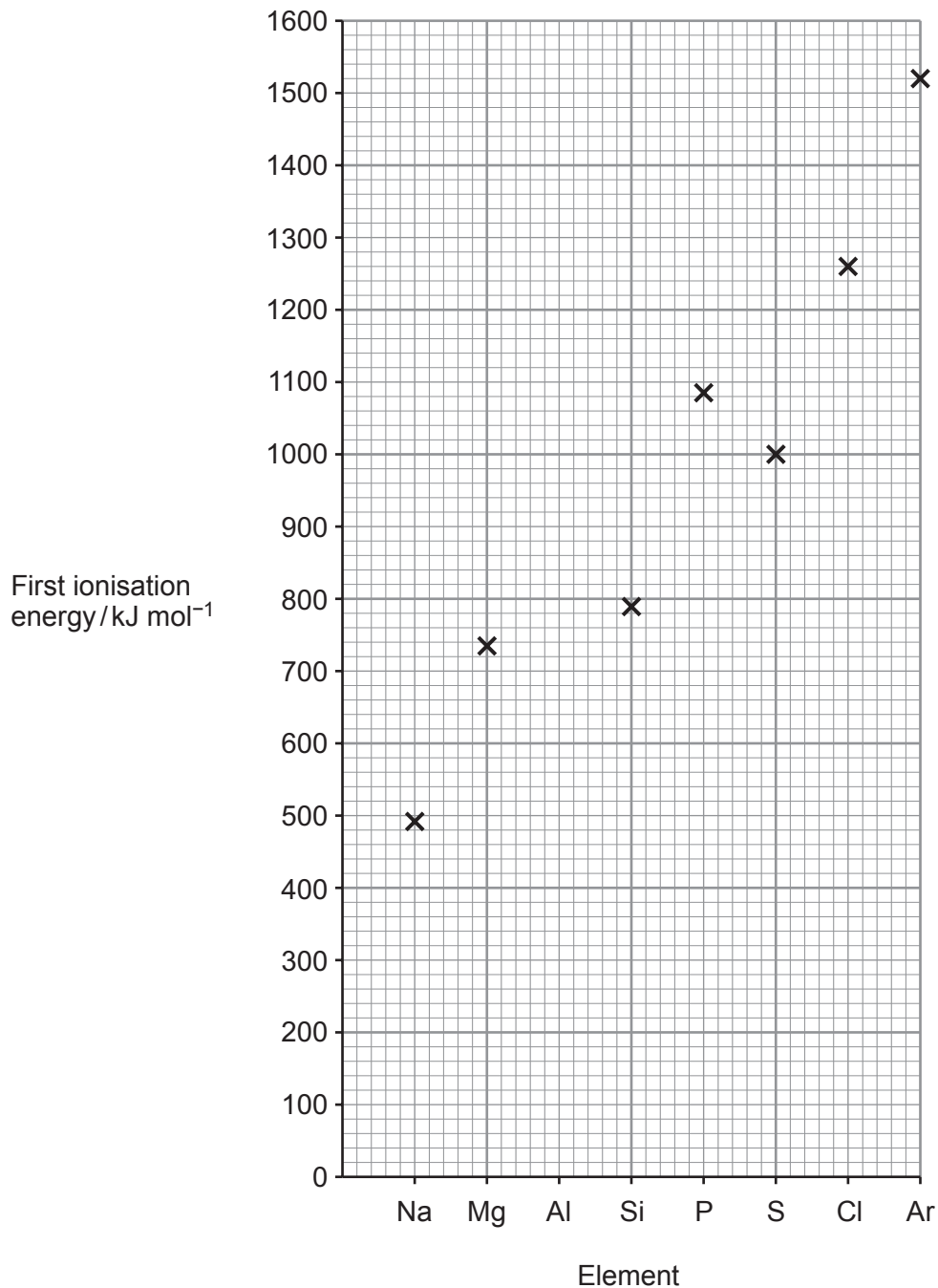
x =

Total [11]



6. Ionisation energies and atomic spectra provide evidence for the arrangement of electrons in atoms.

(a) The following diagram shows the first ionisation energies of the Period 3 elements.



Examiner only

(i) State the meaning of the term *molar first ionisation energy*. [2]

.....

.....

.....

(ii) Draw a cross on the diagram to suggest the first ionisation energy of aluminium.[1]

(iii) Explain why the value of the first ionisation energy of sulfur is less than that of phosphorus. [2]

.....

.....

.....

.....

.....

(b) The table below gives some ionisation energies for magnesium.

	1st	2nd	3rd	4th	5th
Ionisation energy / kJ mol^{-1}	736	1450		10500	13629

(i) Explain why the second ionisation energy is greater than the first. [1]

.....

.....

.....

(ii) Complete the table by suggesting a value for the third ionisation energy of magnesium. [1]

1091
010009



Examiner
only

(c) Explain briefly how the lines in the visible atomic emission spectrum of hydrogen are formed and why the lines become closer together at the high frequency end of the spectrum.

[4]

QWC [1]

.....

.....

.....

.....

.....

.....

.....

.....

.....

Total [12]



BLANK PAGE

**PLEASE DO NOT WRITE
ON THIS PAGE**



Examiner only

7. (a) Lithium was discovered in 1817 by the Swedish chemist Johan August Arfwedson. Its name derives from the Greek word *lithos*, meaning 'stone', to reflect its discovery in a solid mineral, as opposed to potassium, which had been isolated from plant ashes 10 years earlier. Naturally occurring lithium is composed of two stable isotopes – ${}^6\text{Li}$ and ${}^7\text{Li}$.

In a mass spectrometer, a sample of lithium must be ionised before it can be analysed.

(i) Describe how vaporised atoms of Li are converted into Li^+ ions in a mass spectrometer. [2]

.....

.....

.....

(ii) Suggest why no more than the minimum energy is used to ionise the sample of lithium. [1]

.....

.....

(iii) State the difference, if any, between the chemical properties of the isotopes ${}^6\text{Li}$ and ${}^7\text{Li}$, giving a reason for your answer. [2]

.....

.....

.....

(b) The mass spectrum of a naturally occurring sample of lithium gave the following results.

Isotope	% abundance
${}^6\text{Li}$	7.25
${}^7\text{Li}$	92.75

These results can be used to determine the relative atomic mass of the lithium sample.

(i) Calculate the relative atomic mass of the sample. [2]

Relative atomic mass =



- (ii) State and explain which of the Li^+ ions formed from the isotopes of Li will be deflected more in a mass spectrometer. [1]

.....

.....

- (c) Lithium hydroxide reacts with ammonium sulfate to form ammonia, lithium sulfate and water as shown in the equation below.



A 2.06 g sample of ammonium sulfate reacted exactly with 29.80 cm³ of a lithium hydroxide solution.

- (i) Calculate the amount, in moles, of $(\text{NH}_4)_2\text{SO}_4$ in 2.06 g of ammonium sulfate. Give your answer to **three** significant figures. [2]

Number of moles = mol

- (ii) Calculate the concentration, in mol dm⁻³, of the lithium hydroxide solution used. [2]

Concentration = mol dm⁻³

- (iii) Calculate the percentage atom economy for the production of ammonia in the reaction between ammonium sulfate and lithium hydroxide. [2]

Atom economy = %

Total [14]



Examiner only

8. (a) Planners have to ensure a secure supply of energy in the future. It has been suggested that the use of fossil fuels should be reduced, the use of renewable energy increased and that energy efficiency should be greatly improved.

By considering both the benefits and the difficulties involved, discuss whether you think that these suggestions are realistic.

[4]
QWC [1]

.....

.....

.....

.....

.....

.....

.....

.....

.....

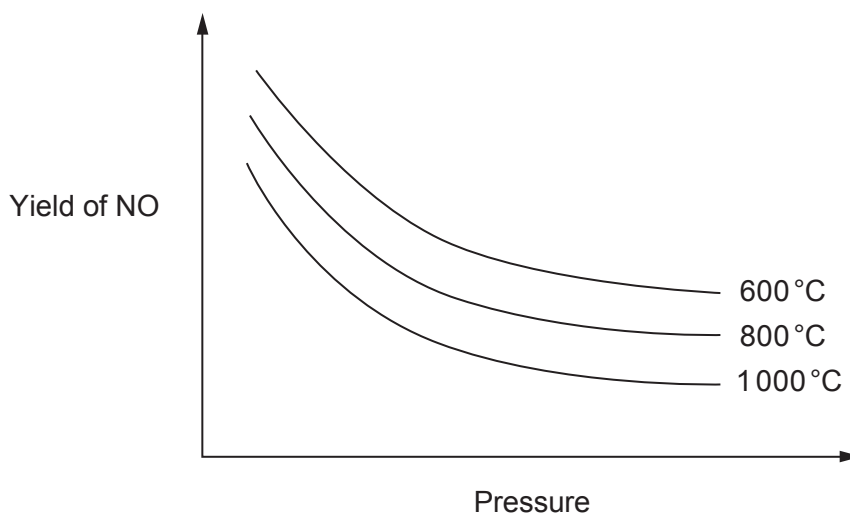
.....

- (b) Nitric acid is produced by the Ostwald process.

The first stage involves the oxidation of ammonia over a platinum/rhodium catalyst.



The graph below shows how the yield of nitric oxide, NO, depends on the temperature and pressure used in its production.



Examiner
only

(i) I. State the general variations in this yield with temperature and pressure. [1]

.....
.....

II. Use the graphs to explain whether the reaction is endothermic or exothermic and whether there are more moles of gaseous products than reactants. [4]
QWC [1]

.....
.....
.....
.....
.....
.....
.....
.....
.....
.....

(ii) Normally the process is carried out at a temperature of around 900 °C. Suggest why this temperature is used. [2]

.....
.....
.....

(iii) State the **type** of catalyst used. [1]

.....


(iv) Explain why there has been much research to find a better catalyst. [2]

.....
.....
.....

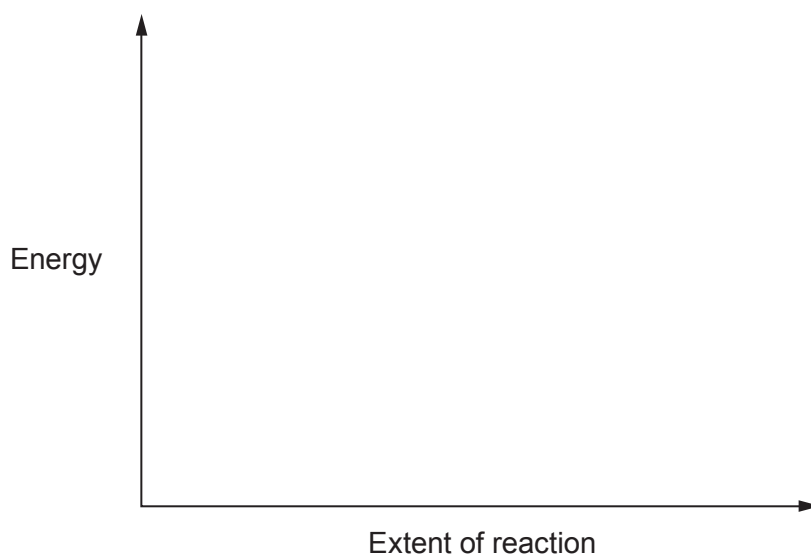


16

- (v) The next stage in the Ostwald process is to convert the nitric oxide to nitrogen dioxide.



Sketch on the axes below the energy profile for this reaction, clearly labelling the enthalpy change of reaction, ΔH . [2]



- (vi) Write an expression that connects the enthalpy change of a reaction, ΔH , with the activation energies of the forward (E_f) and reverse (E_b) reactions. [1]

.....

Total [19]




BLANK PAGE

**PLEASE DO NOT WRITE
ON THIS PAGE**



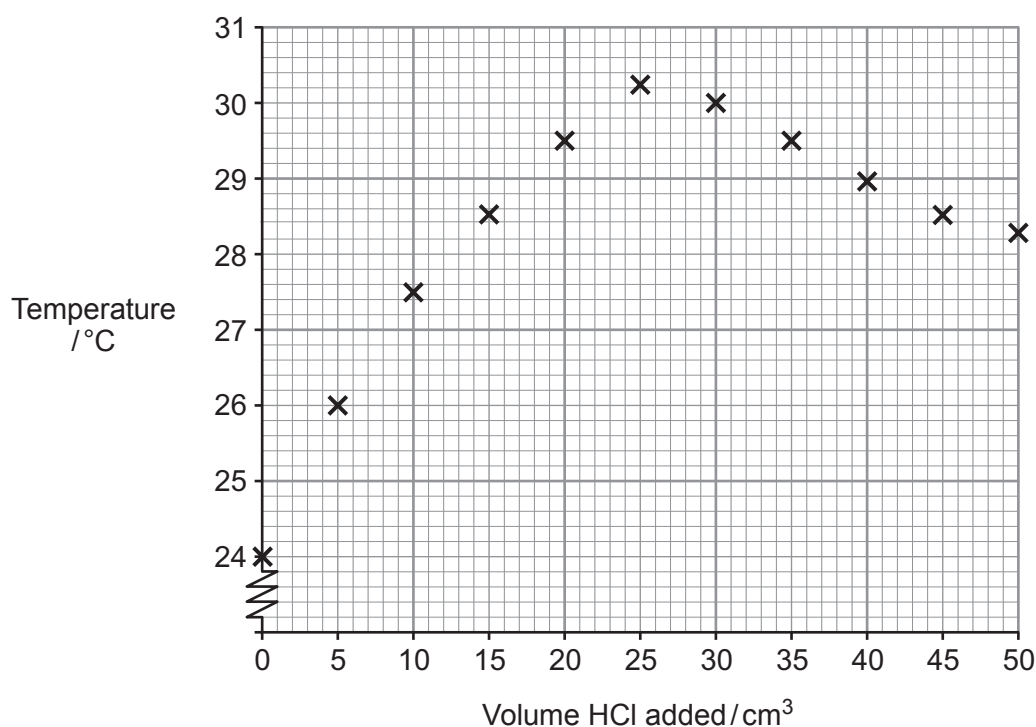
9. Zac was asked to measure the molar enthalpy change of neutralisation of sodium hydroxide by hydrochloric acid.



He was told to use the following method:

- Measure 25.0 cm^3 of sodium hydroxide solution of concentration 0.970 mol dm^{-3} into a polystyrene cup.
- Measure the temperature of the solution.
- Place the hydrochloric acid solution into a suitable container and measure the temperature of the solution.
- When the temperatures of both solutions are equal add 5.00 cm^3 of hydrochloric acid to the sodium hydroxide and stir.
- Measure the temperature of the mixture.
- Keep adding 5.00 cm^3 portions of hydrochloric acid, until 50.0 cm^3 have been added, stirring and measuring the temperature each time.

Zac's results are shown on the graph below.



Examiner
only

- (a) Suggest why it is important that the hydrochloric acid and the sodium hydroxide are at the same temperature. [1]

.....
.....

- (b) By drawing lines of best fit for both sets of points determine:

- (i) the maximum temperature **change** [2]

Maximum temperature rise from the graph = °C

- (ii) the volume of acid required to neutralise the sodium hydroxide. [1]

Volume of acid = cm³

- (c) Use your value from part (b)(ii) to calculate the concentration, in mol dm⁻³, of the hydrochloric acid solution. [2]

Concentration = mol dm⁻³

- (d) Use **both** values from part (b) to calculate the heat given out during **this** experiment.

[Assume that the density of the solution is 1.00 g cm⁻³ and that its specific heat capacity is 4.18 J K⁻¹ g⁻¹] [1]

Heat given out = J

- (e) Calculate the molar enthalpy change, ΔH , for the reaction between sodium hydroxide and hydrochloric acid. [2]

ΔH = kJ mol⁻¹



Examiner
only

(f) Name a piece of apparatus that Zac could use to measure exactly 25.0 cm³ of the sodium hydroxide solution. [1]

.....

(g) Explain why the temperature falls on continuing to add hydrochloric acid **after** the maximum temperature has been reached. [2]

.....

.....

.....

.....

(h) The data book value for this molar enthalpy change of neutralisation is more exothermic than Zac's value.

State the **main** reason for the difference between the values and suggest **one** change that would improve his result. [2]

.....

.....

.....

.....

Total [14]

Section B Total [70]

END OF PAPER



BLANK PAGE

**PLEASE DO NOT WRITE
ON THIS PAGE**



BLANK PAGE

**PLEASE DO NOT WRITE
ON THIS PAGE**





GCE AS/A level

1091/01-A



S15-1091-01A

**CHEMISTRY – PERIODIC TABLE
FOR USE WITH CH1**

A.M. FRIDAY, 22 May 2015

