

Write your name here

Surname

Other names

Pearson Edexcel
International
Advanced Level

Centre Number

--	--	--	--	--

Candidate Number

--	--	--	--

Core Mathematics C12

Advanced Subsidiary

Sample Assessment Material
Time: 2 hours 30 minutes

Paper Reference

WMA01/01

You must have:

Mathematical Formulae and Statistical Tables (Blue)

Total Marks

--

Candidates may use any calculator allowed by the regulations of the Joint Council for Qualifications. Calculators must not have the facility for symbolic algebra manipulation, differentiation and integration, or have retrievable mathematical formulae stored in them.

Instructions

- Use **black** ink or ball-point pen.
- If pencil is used for diagrams/sketches/graphs it must be dark (HB or B). Coloured pencils and highlighter pens must not be used.
- **Fill in the boxes** at the top of this page with your name, centre number and candidate number.
- Answer **all** questions and ensure that your answers to parts of questions are clearly labelled.
- Answer the questions in the spaces provided
– *there may be more space than you need.*
- You should show sufficient working to make your methods clear. Answers without working may not gain full credit.
- When a calculator is used, the answer should be given to an appropriate degree of accuracy.

Information

- The total mark for this paper is 125.
- The marks for **each** question are shown in brackets
– *use this as a guide as to how much time to spend on each question.*

Advice

- Read each question carefully before you start to answer it.
- Try to answer every question.
- Check your answers if you have time at the end.

Turn over ►

S44999A

©2013 Pearson Education Ltd.



S 4 4 9 9 9 A 0 1 4 4

PEARSON

4. Given that $y = 2x^5 + 7 + \frac{1}{x^3}$, $x \neq 0$, find, in their simplest form,

(a) $\frac{dy}{dx}$, **(3)**

(b) $\int y \, dx$. **(4)**

8. The equation

$$(k + 3)x^2 + 6x + k = 5, \text{ where } k \text{ is a constant,}$$

has two distinct real solutions for x .

(a) Show that k satisfies

$$k^2 - 2k - 24 < 0 \tag{4}$$

(b) Hence find the set of possible values of k . **(3)**

10.

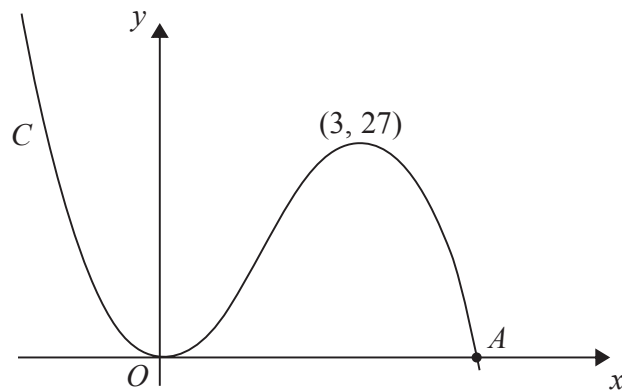


Figure 1

Figure 1 shows a sketch of the curve C with equation $y = f(x)$, where

$$f(x) = x^2(9 - 2x).$$

There is a minimum at the origin, a maximum at the point $(3, 27)$ and C cuts the x -axis at the point A .

(a) Write down the coordinates of the point A . (1)

(b) On separate diagrams sketch the curve with equation

(i) $y = f(x + 3)$,

(ii) $y = f(3x)$.

On each sketch you should indicate clearly the coordinates of the maximum point and any points where the curves cross or meet the coordinate axes. (6)

The curve with equation $y = f(x) + k$, where k is a constant, has a maximum point at $(3, 10)$.

(c) Write down the value of k . (1)



Leave
blank

Question 10 continued

A series of 32 horizontal lines for writing the answer to Question 10.

(Total 8 marks)

Q10
□

12. The circle C has centre $A(2, 1)$ and passes through the point $B(10, 7)$

(a) Find an equation for C . (4)

The line l_1 is the tangent to C at the point B .

(b) Find an equation for l_1 (4)

The line l_2 is parallel to l_1 and passes through the mid-point of AB .

Given that l_2 intersects C at the points P and Q ,

(c) find the length of PQ , giving your answer in its simplest surd form. (3)

13.

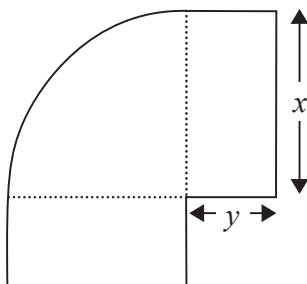
**Figure 3**

Figure 3 shows a flowerbed. Its shape is a quarter of a circle of radius x metres with two equal rectangles attached to it along its radii. Each rectangle has length equal to x metres and width equal to y metres.

Given that the area of the flowerbed is 4 m^2 ,

(a) show that

$$y = \frac{16 - \pi x^2}{8x} \quad (3)$$

(b) Hence show that the perimeter P metres of the flowerbed is given by the equation

$$P = \frac{8}{x} + 2x \quad (3)$$

(c) Use calculus to find the minimum value of P . (5)

Question 13 continued

Leave
blank

Lined writing area for the question response.

Question 13 continued

Lined writing area for the answer to Question 13.

Leave blank

Q13

(Total 11 marks)

--	--

Question 14 continued

Leave
blank

A series of horizontal lines provided for writing the answer to Question 14.

Q14

(Total 10 marks)

--	--

15.

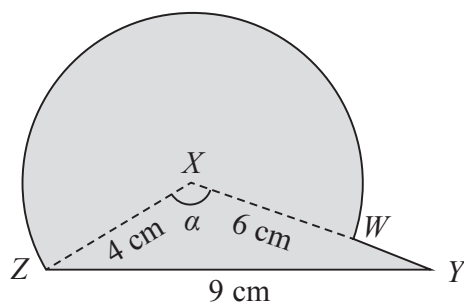


Figure 4

The triangle XYZ in Figure 4 has $XY = 6$ cm, $YZ = 9$ cm, $ZX = 4$ cm and angle $ZXY = \alpha$. The point W lies on the line XY .

The circular arc ZW , in Figure 4 is a major arc of the circle with centre X and radius 4 cm.

(a) Show that, to 3 significant figures, $\alpha = 2.22$ radians. (2)

(b) Find the area, in cm^2 , of the major sector $XZWX$. (3)

The region enclosed by the major arc ZW of the circle and the lines WY and YZ is shown shaded in Figure 4.

Calculate

(c) the area of this shaded region, (3)

(d) the perimeter $ZWYZ$ of this shaded region. (4)

16. Maria trains for a triathlon, which involves swimming, cycling and running. On the first day of training she swims 1.5 km and then she swims 1.5 km on each of the following days.

- (a) Find the **total** distance that Maria swims in the first 17 days of training. **(1)**

Maria also runs 1.5 km on the first day of training and on each of the following days she runs 0.25 km further than on the previous day. So she runs 1.75 km on the second day and 2 km on the third day and so on.

- (b) Find how far Maria runs on the 17th day of training. **(2)**

Maria also cycles 1.5 km on the first day of training and on each of the following days she cycles 5% further than on the previous day.

- (c) Find the **total** distance that Maria cycles in the first 17 days of training. **(3)**

- (d) Find the **total** distance Maria travels by swimming, running and cycling in the first 17 days of training. **(3)**

Maria needs to cycle 40 km in the triathlon.

- (e) On which day of training does Maria first cycle more than 40 km? **(4)**

Question 16 continued

Lined area for student response.

Question 16 continued

Leave blank

Area for writing answers to Question 16, consisting of approximately 35 horizontal lines.

Q16

(Total 13 marks)

TOTAL FOR PAPER: 125 MARKS

END