

1.

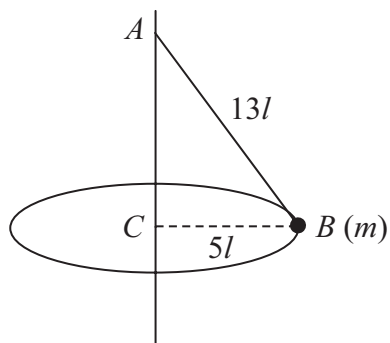


Figure 1

A garden game is played with a small ball B of mass m attached to one end of a light inextensible string of length $13l$. The other end of the string is fixed to a point A on a vertical pole as shown in Figure 1. The ball is hit and moves with constant speed in a horizontal circle of radius $5l$ and centre C , where C is vertically below A . Modelling the ball as a particle, find

(a) the tension in the string,

(3)

(b) the speed of the ball.

(4)



2. A particle P of mass m is above the surface of the Earth at distance x from the centre of the Earth. The Earth exerts a gravitational force on P . The magnitude of this force is inversely proportional to x^2 .

At the surface of the Earth the acceleration due to gravity is g . The Earth is modelled as a sphere of radius R .

- (a) Prove that the magnitude of the gravitational force on P is $\frac{mgR^2}{x^2}$. (3)

A particle is fired vertically upwards from the surface of the Earth with initial speed $3U$. At a height R above the surface of the Earth the speed of the particle is U .

- (b) Find U in terms of g and R . (7)

Leave
blank

Question 3 continued

Lined writing area for the answer to Question 3.



4.

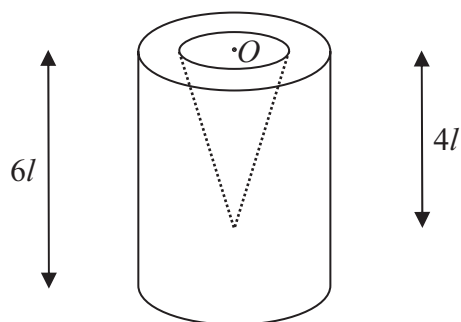


Figure 3

A container is formed by removing a right circular solid cone of height $4l$ from a uniform solid right circular cylinder of height $6l$. The centre O of the plane face of the cone coincides with the centre of a plane face of the cylinder and the axis of the cone coincides with the axis of the cylinder, as shown in Figure 3. The cylinder has radius $2l$ and the base of the cone has radius l .

(a) Find the distance of the centre of mass of the container from O .

(6)

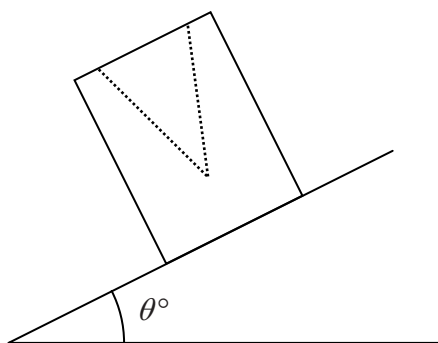


Figure 4

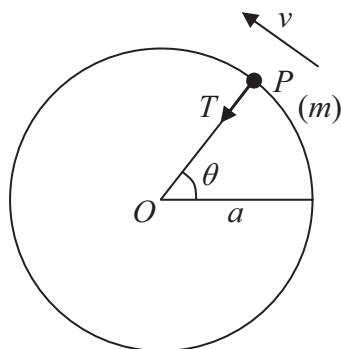
The container is placed on a plane which is inclined at an angle θ° to the horizontal. The open face is uppermost, as shown in Figure 4. The plane is sufficiently rough to prevent the container from sliding. The container is on the point of toppling.

(b) Find the value of θ .

(4)



5.

**Figure 5**

A particle P of mass m is attached to one end of a light inextensible string of length a . The other end of the string is fixed at the point O . The particle is initially held with OP horizontal and the string taut. It is then projected vertically upwards with speed u , where $u^2 = 5ag$. When OP has turned through an angle θ the speed of P is v and the tension in the string is T , as shown in Figure 5.

- (a) Find, in terms of a , g and θ , an expression for v^2 . (3)
- (b) Find, in terms of m , g and θ , an expression for T . (4)
- (c) Prove that P moves in a complete circle. (3)
- (d) Find the maximum speed of P . (2)



7. A light elastic string, of natural length $3a$ and modulus of elasticity $6mg$, has one end attached to a fixed point A . A particle P of mass $2m$ is attached to the other end of the string and hangs in equilibrium at the point O , vertically below A .

(a) Find the distance AO . (3)

The particle is now raised to point C vertically below A , where $AC > 3a$, and is released from rest.

(b) Show that P moves with simple harmonic motion of period $2\pi\sqrt{\left(\frac{a}{g}\right)}$. (5)

It is given that $OC = \frac{1}{4}a$.

(c) Find the greatest speed of P during the motion. (3)

The point D is vertically above O and $OD = \frac{1}{8}a$. The string is cut as P passes through D , moving upwards.

(d) Find the greatest height of P above O in the subsequent motion. (4)



